



ESERCIZI SULLE FRAZIONI

COLORA LA PARTE INDICATA DALLA FRAZIONE



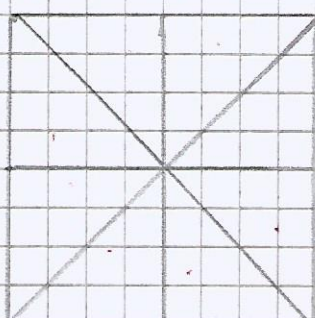
$$\rightarrow \frac{1}{4}$$




$$\rightarrow \frac{2}{5}$$



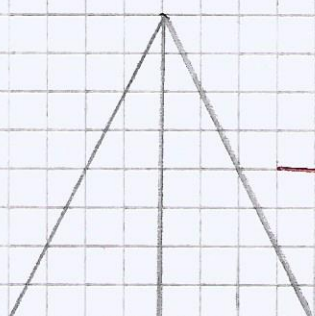
$$\rightarrow \frac{1}{8}$$



$$\rightarrow \frac{6}{8}$$



$$\rightarrow \frac{2}{4}$$



$$\rightarrow \frac{1}{2}$$

SCRIVI LE UNITA' FRAZIONARIE
IN OGNI FIGURA

